

Şekil Sayı Eşleştirme

+

= 1

→

= 3

○

= 6

△

= 2

☆

= 9

◇

= 7

□

= 0

▽

= 5

×

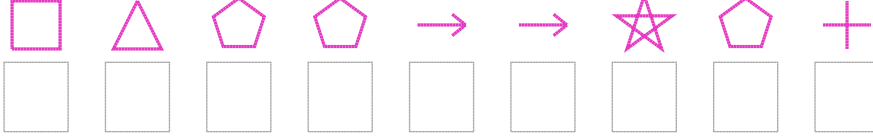
= 8

⬠

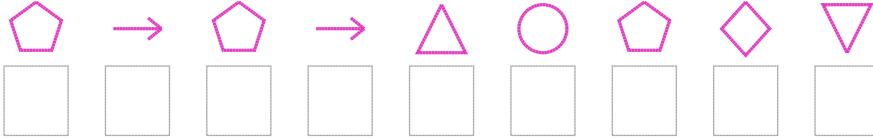
= 4

Aşağıdaki uzun şifreleri hatasız çözerek altlarına yazın:

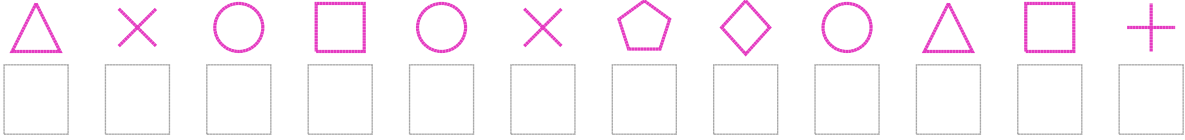
1. Şifre




2. Şifre



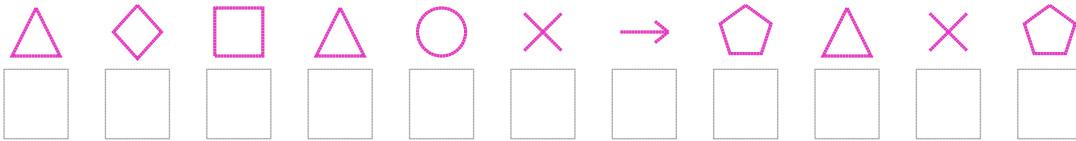
3. Şifre



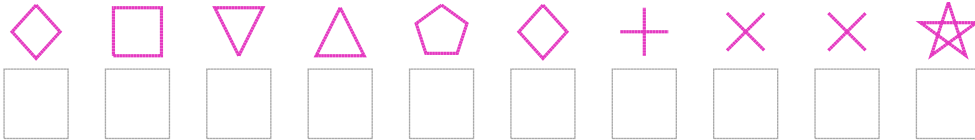
4. Şifre



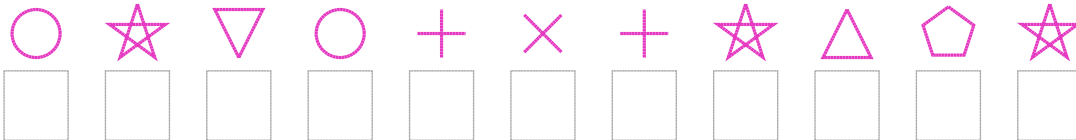
5. Şifre



6. Şifre



7. Şifre



□ BONUS: 3. ve 4. şifrenin üçüncü rakamının toplamı kaçtır?

Cevap Anahtarı

1. Şifre: 024433941
2. Şifre: 434326475
3. Şifre: 286068476201
4. Şifre: 945809684379
5. Şifre: 27026834284
6. Şifre: 7052471889
7. Şifre: 69561819249

□ Bonus Soru Cevabı: 11